


Year 4 Homework, Spring Term 1 Week 1 - Support

Maths


One

Make equal groups with 12 counters.
Can you do it in different ways?


Two

Complete the stem sentence:

There are _____ groups of _____ cherries.

Three


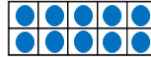

_____ twos 

Four

 $_ + _ + _ = 15$
 $_ \times _ = _$

Five

Do you agree with Ranjit?
I have shown that $3 \times 10 = 30$

Reading:

Remember you must read every day for 15 minutes. This can be reading a book or practising your phonic or digraphs. Please record this in your Home link book.

Spellings

seed
weed
heel
green
queen
bee
sheep
feet
sweet
they

SPaG Challenge in books please

Join the clauses using the conjunctions below.

- The teacher told us off we completely run out.
- Let's get some petrol we came back from camp.
- We had to unpack you paid me to do it.
- I wouldn't eat a worm Drew is better at English.
- I'm good at maths we were running indoors.

Times Tables Activities

Please do some of the following:

- Daily times tables on TT Rockstars
- Daily chanting and oral questioning
- Hit the Button – Times tables

Please remember: All homework is marked in class with the children and will not have written feedback on it.

Homework is due in on the following Friday