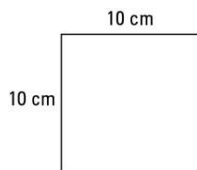


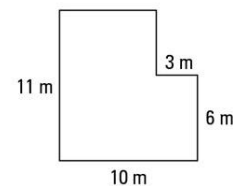
Maths: Speedy Six



1. What is the second prime number?
2. Put these numbers into ascending order.
0.9, 0.957, 0.8
3. What is $3.21 \times 100 =$
4. What are all the factors of 10?
5. What is $\frac{3}{8}$ of 24?
6. What is the perimeter of this shape?



1. What is the 6th prime number?
2. Put these numbers into ascending order.
0.333, 0.33, 0.3, 3.3
3. What is 45.76 divided by 1000?
4. What are the common factors of 15 and 30?
5. What is $\frac{4}{9}$ of 108?
6. What is the perimeter of this shape?



English Homework

Please see the separate sheet for more detail on your Famous Volcano research.

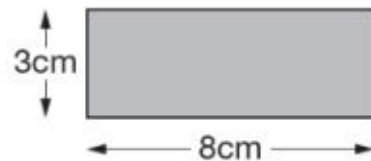
Spellings

<u>Core</u>	<u>Support</u>
eight	tough
weight	rough
height	enough
achieve	through
field	although
mischievous	play
enough	may
thought	way
colour	away
favourite	eight

Optional Maths Extension:

One bonus house point available

Alfie has some rectangles.



He makes this shape using three of the rectangles.



What is the **perimeter** of Alfie's shape?