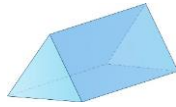


## Year 5 Homework, Spring Term Week 10

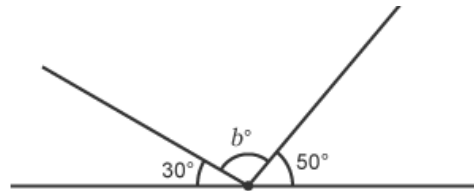
### Maths: Speedy Six



1. What is  $22.7 \times 100 =$
2. What number is exactly between 5 and 8?
3. What is  $\frac{4}{6}$  of 72?
4. Round 4 565 to the nearest 1000.
5.  $\frac{3}{7} + \frac{3}{7} =$
6. How many faces and edges does a triangular prism have?



1. What is 34 587 divided by 1000?
2. What is  $\frac{33}{99}$  in its lowest form?
3. What is  $\frac{7}{12}$  of 228?
4.  $\frac{4}{9} + \frac{2}{5} =$
5. What is 30% of 420?
6. What is angle b (not to scale)?



**Quick Comprehension:** Complete the sheet 'Help I'm stuck'. Children should allow themselves one minute to read the text, and five/ten minutes to answer the questions. Some of the questions are quite tricky, so don't worry if you have to talk them through with an adult.

### Spellings

<u>Core</u>	<u>Support</u>
education	visit
pollution	revisit
demonstration	opened
nation	unopened
revolution	explode
contribution	quick
position	quicker
emotion	quickest
existence	some
convenience	come

### Optional Maths Extension:

One bonus house point available

Here are four fraction cards.


$$\frac{3}{4}$$

$$\frac{5}{8}$$

$$\frac{6}{12}$$

$$\frac{7}{16}$$

Use any **three** of the cards to make this correct.



<



<

