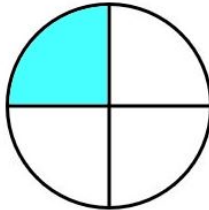


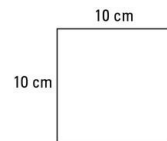
## Maths: Speedy Six



1. What is 4 squared? ( $4 \times 4$ )
2. Order these numbers with the smallest first.  
26, 48, 37, 19
3.  $323 + 10$
4. What is  $10 \times 10$ ?
5.  $554 + 134 =$
6. What fraction is shaded?



1. What is 4 squared? ( $4 \times 4$ )
2. Put these numbers into ascending order.  
0.50    4    1.5
3. What is  $3.1 \times 10 =$
4. What is  $10 \times 10$ ?
5.  $554 + 554 =$
6. What is the perimeter of this shape?  
Remember to add up all the sides.



Keep practising your times tables.

## English Homework

Please see the separate sheet for more detail on your Famous Volcano research.

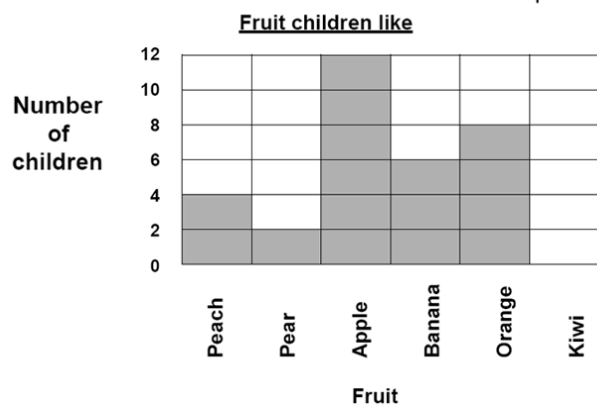
## Spellings

all  
ball  
call  
walk  
talk  
always

## Optional Maths Extension:

One bonus house point available

11. Look at this bar chart and answer the questions.



1. Which is the favourite fruit?
2. How many children like oranges?
3. Which fruit do six children like?