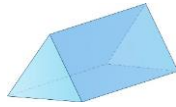


Year 5 Homework, Spring Term Week 10

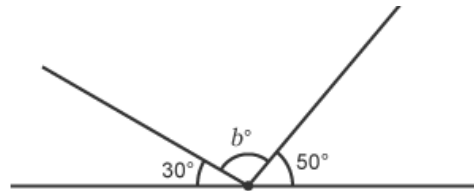
Maths: Speedy Six



1. What is $22.7 \times 100 =$
2. What number is exactly between 5 and 8?
3. What is $\frac{4}{6}$ of 72?
4. Round 4 565 to the nearest 1000.
5. $\frac{3}{7} + \frac{3}{7} =$
6. How many faces and edges does a triangular prism have?



1. What is 34 587 divided by 1000?
2. What is $\frac{33}{99}$ in its lowest form?
3. What is $\frac{7}{12}$ of 228?
4. $\frac{4}{9} + \frac{2}{5} =$
5. What is 30% of 420?
6. What is angle b (not to scale)?



Quick Comprehension: Complete the sheet 'Help I'm stuck'. Children should allow themselves one minute to read the text, and five/ten minutes to answer the questions. Some of the questions are quite tricky, so don't worry if you have to talk them through with an adult.

Spellings

Core

hoping
hoped
hopeful
hopeless
tuned
tuneful
tuneless
tuning
stomach
yacht

Support

given
visit
keep
broken
work
sink
dark
park
book
took

Optional Maths Extension:

One bonus house point available

Here are four fraction cards.


$$\frac{3}{4}$$

$$\frac{5}{8}$$

$$\frac{6}{12}$$

$$\frac{7}{16}$$

Use any **three** of the cards to make this correct.



<



<

