


## Year 5 Homework, Summer Term Week 5

### Maths: Speedy Six



1.  $124 \times 100 =$
2. What is 3 squared?
3. What is 10% of 120? (Remember divide 120 by 10)
4. Round 999 to the nearest 100.
5. What is  $532 \times 5$ ?
6. What is the name of this shape?



**Quick Comprehension:** Complete the sheet 'A recipe for a Healthy Fruit Salad'. Children should allow themselves one minute to read the text, and five/ten minutes to answer the questions. Some of the questions are quite tricky, so don't worry if you have to talk them through with an adult.

### Spellings

<u>Core</u>	<u>Support</u>
interest	creation
disinterest	education
interested	terrific
different	comic
differently	picnic
difference	artist
library	keep
voluntary	been
achieve	sheep
mischievous	feet

### Optional Maths Extension:


One bonus house point available  
Find the area of the shapes by counting the squares.

1)




Area = \_\_\_\_\_

2)



Area = \_\_\_\_\_

3)



Area = \_\_\_\_\_

Homework is due in on 28<sup>th</sup> May